

Calculus

F 23 March 2012

RESET THE
SESSION

SET THE
PARTICIPANT
LIST

PLUG IN THE
RECEIVER

New topics (see diary)

Topics covered are in bounds

Boxed answers agree with
TurningPoint answers

Points agree with
TurningPoint points

Points total to 100

Cover the look ahead

QUIZ
FOLLOWS

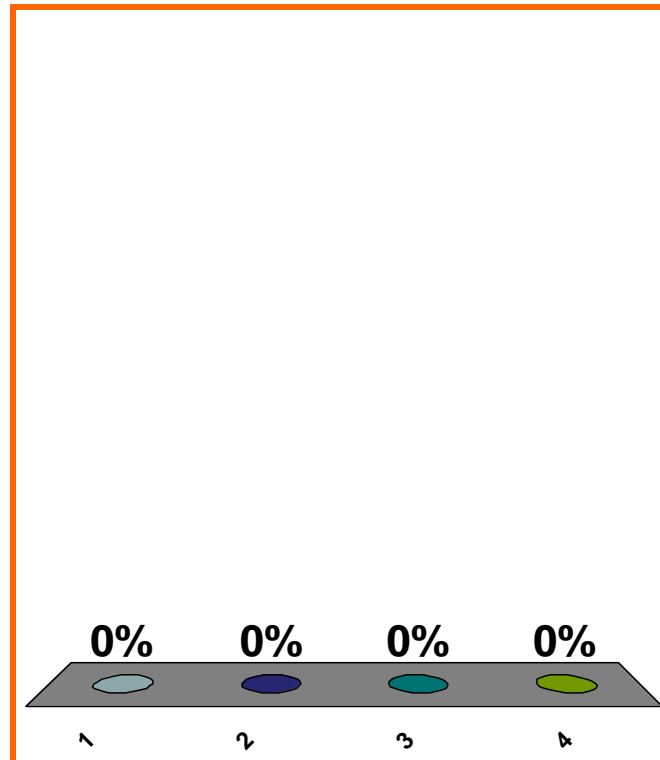
Newton's method formula
to solve $x^3 + x^2 - 4 = 0$.

(a) $x_{n+1} = x_n - \frac{3x_n^2 + 2x_n}{x_n^3 + x_n^2 - 4}$

(b) $x_{n+1} = x_n + \frac{3x_n^2 + 2x_n}{x_n^3 + x_n^2 - 4}$

(c) $x_{n+1} = x_n - \frac{x_n^3 + x_n^2 - 4}{3x_n^2 + 2x_n}$

(d) none of the above



1	2	3	4	5	6	7	8	9	10	11	12	13	14	15	16	17	18	19	20
21	22	23	24	25	26	27	28	29	30	31	32	33	34	35	36	37	38	39	40

Newton's method formula
to solve $x^5 + x^3 = 4$.

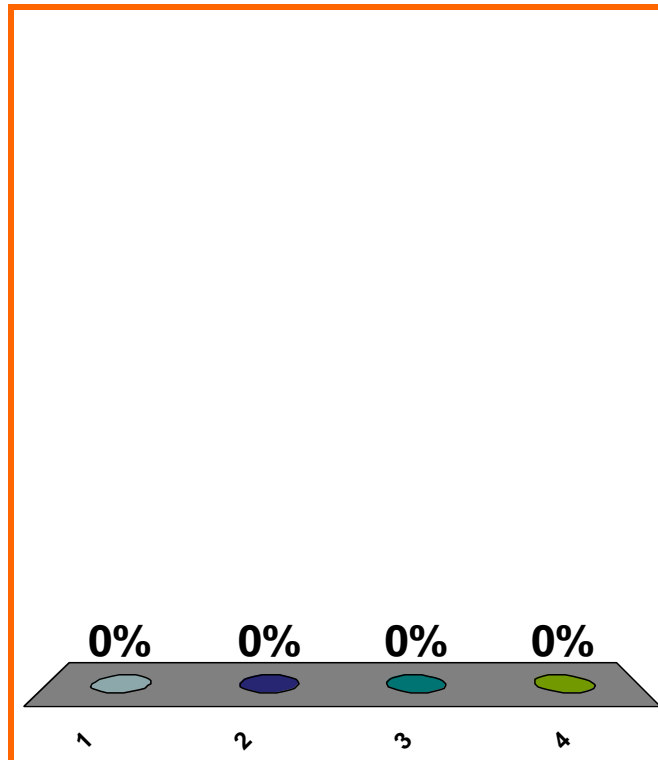
(a) $x_{n+1} = x_n + \frac{x_n^5 + x_n^3}{5x_n^4 + 3x_n^2}$

(b) $x_{n+1} = x_n + \frac{5x_n^4 + 3x_n^2}{x_n^5 + x_n^3}$

(c) $x_{n+1} = x_n - \frac{x_n^5 + x_n^3}{5x_n^4 + 3x_n^2}$

(d) none of the above

Correct: $x_{n+1} = x_n - \frac{x_n^5 + x_n^3 - 4}{5x_n^4 + 3x_n^2}$



1	2	3	4	5	6	7	8	9	10	11	12	13	14	15	16	17	18	19	20
21	22	23	24	25	26	27	28	29	30	31	32	33	34	35	36	37	38	39	40

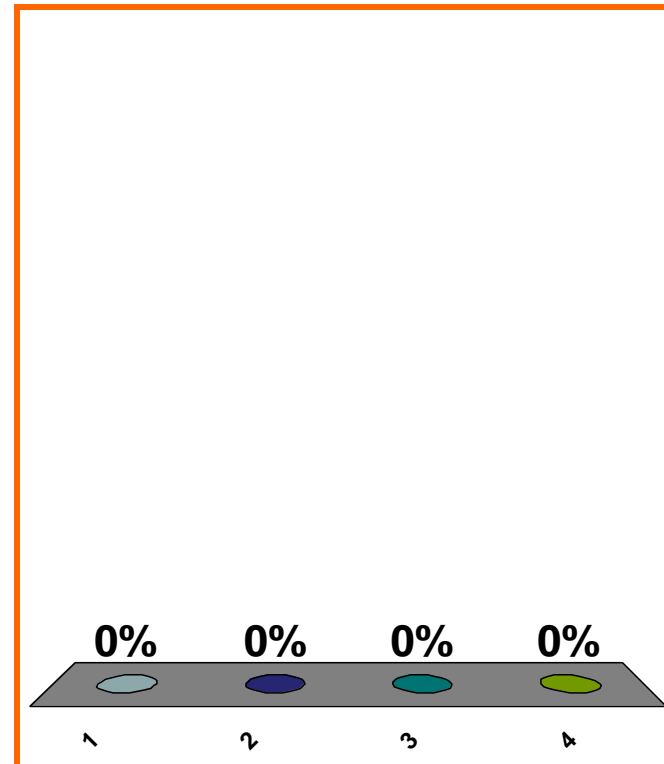
Newton's method formula
to solve $(\cos x) + x^3 - 4 = 0$.

(a) $x_{n+1} = x_n - \frac{(\sin x_n) + 3x_n^2}{(\cos x_n) + x_n^3 - 4}$

(b) $x_{n+1} = x_n - \frac{(\cos x_n) + x_n^3 - 4}{(\sin x_n) + 3x_n^2}$

(c) $x_{n+1} = x_n - \frac{(\cos x_n) + x_n^3 - 4}{-(\sin x_n) + 3x_n^2}$

(d) none of the above



1	2	3	4	5	6	7	8	9	10	11	12	13	14	15	16	17	18	19	20
21	22	23	24	25	26	27	28	29	30	31	32	33	34	35	36	37	38	39	40

0 of 5

Topic 0530

20 pts

Newton's method
for solving $e^x + x = 4$:

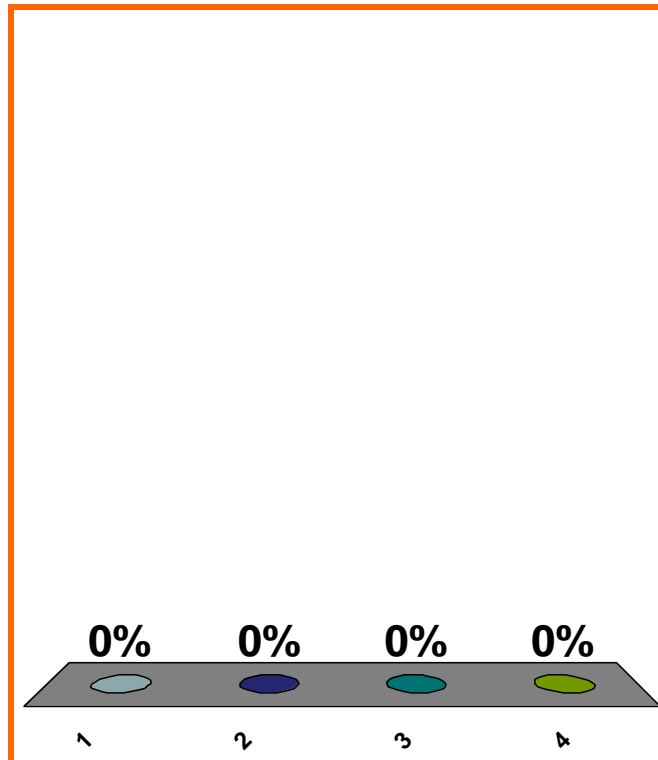
$$x_{n+1} = ??$$

$$(a) \quad x_n - \frac{e^{x_n} + x_n}{e^{x_n} + 1}$$

$$(b) \quad x_n - \frac{e^{x_n} + x_n - 4}{e^{x_n} + 1}$$

$$(c) \quad x_n - \frac{e^{x_n} + 4}{e^{x_n} + x_n}$$

(d) none of the above



1	2	3	4	5	6	7	8	9	10	11	12	13	14	15	16	17	18	19	20
21	22	23	24	25	26	27	28	29	30	31	32	33	34	35	36	37	38	39	40

Newton's method
for solving $f(x) = 1$:

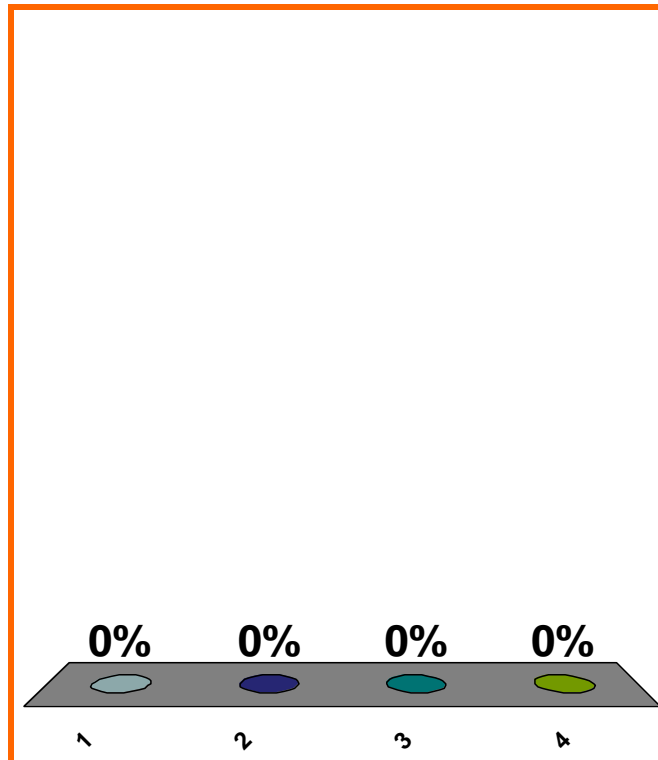
$$x_{n+1} = ??$$

$$(a) \quad x_n - \frac{f(x_n)}{f'(x_n)}$$

$$(b) \quad x_n - \frac{[f(x_n)] - 1}{f'(x_n)}$$

$$(c) \quad x_n - \frac{f'(x_n)}{f(x_n)}$$

(d) none of the above



1	2	3	4	5	6	7	8	9	10	11	12	13	14	15	16	17	18	19	20
21	22	23	24	25	26	27	28	29	30	31	32	33	34	35	36	37	38	39	40

LOOK BACK

derivs w.r.t. t of exprs of r , x , w , etc.

CURRENT

Sand is being poured into a conical pile that is always twice as wide as it is high. Each minute, 50 cubic feet gets added to the pile. **How fast** is the height of the pile increasing, when the pile is 10 feet high?

CURRENT

An FBI agent with a powerful spyglass is located in a boat anchored 400 meters offshore. A gangster under surveillance is walking along the shore. Assuming the shoreline is straight and that the gangster is walking at the rate of 2 km/hr, **how fast** must the FBI agent rotate the spyglass to track the gangster when the gangster is 1 km from the point on the shore nearest to the boat?

LOOK AHEAD

$$\frac{d}{dx} \left[\int_1^x (\cos t) dt \right]$$

$$\Delta \left[\sum_{j=1}^n (\cos j) \right]$$

LOOK BACK (implicit diff. & IFT)

derivs of arcsin, arccos
derivs of arctan, arccot

$$f(x) = x^7 + x$$

$$g = f^{-1}$$

Find $g(2)$ and $g'(2)$.

LOOK BACK

$$y = (2x^2 - x + 1)(\cos(3x))$$

Δy , dy ,

eq'n of tangent line at $(0, 1)$,

linearization at $x = 0$

$$f(x) = 2x \quad \Rightarrow \quad f(s+t) = (f(s)) + (f(t))??$$

$$f(x) = 3x \quad \Rightarrow \quad f(s+t) = (f(s)) + (f(t))??$$

$$f(x) = 4x+1 \quad \Rightarrow \quad f(s+t) = (f(s)) + (f(t))??$$

limit of quotient = quotient of limits ?

$$e^{\ln x} = x \quad ?$$

$$\ln e^x = x \quad ?$$

$$x^2/x = x \quad ?$$

$$x/x^2 = 1/x \quad ?$$

$$\text{position} = 2t^3 + 5t^2$$

$$\text{velocity at } t = 3 \quad ?$$

SAVE THE
SESSION
DATA

RETURN TO
PRESENTATION